

**TEST NAME: Fall SOY Checkpoint Grade 3 Math Content**

**TEST ID: 27**

**GRADE: 03 - 04**

**SUBJECT: Mathematics**

**TEST CATEGORY: Start of Year Checkpoint**

## 08/10/20, Fall SOY Checkpoint Grade 3 Math Content

Student: \_\_\_\_\_

Class: \_\_\_\_\_

Date: \_\_\_\_\_

### Instructions

The Grade 3 Math test has two subparts. Each subpart contains different types of questions. To begin the test, click the "Next" arrow button at the top.

Read the passage - 'VH983897\_directions' - and answer the question below:

### VH983897\_directions

Subpart 1 of this test contains different types of assessment questions in Grade 3 Math. You may make notes on scratch paper or use the Notepad tool within the online test. Make sure you answer all the questions. You MAY NOT use a calculator in Subpart 1 of this test.



1. What number goes in the box to make the equation true?

$$\frac{\boxed{\phantom{000}}}{2} = 1$$


- A. 1
- B. 2
- C. 4
- D. 8

2. There are 5 rows with 7 desks in each row.

What is the total number of desks?

- A. 2
- B. 12
- C. 28
- D. 35

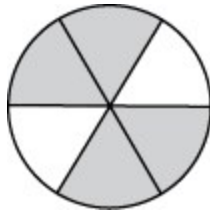
3. This rectangle is tiled with unit squares.



Which expression can be used to find the area of the rectangle?

- A.  $6 + 5$
- B.  $6 \times 5$
- C.  $7 + 6$
- D.  $7 \times 6$

4. This circle shows equal-sized parts.



What fraction of the circle is shaded?

- A.  $\frac{4}{6}$
- B.  $\frac{2}{4}$
- C.  $\frac{2}{6}$
- D.  $\frac{1}{4}$

5. Which equation can be used to find the unknown number in  $48 \div 8 = \square$ ?

- A.  $4 \times \square = 8$
- B.  $4 \times \square = 48$
- C.  $8 \times \square = 48$
- D.  $8 \div \square = 48$

6. Which quotients are equal to 2? Choose the **three** correct answers.

Pick up to 3 answers.

A.  $6 \div 3$

B.  $10 \div 5$

C.  $18 \div 6$

D.  $16 \div 4$

E.  $12 \div 6$

F.  $14 \div 2$

7. Randa has 15 markers. Peggy gives her 3 more markers. Randa and Peggy equally share all the markers.

How many markers do Randa and Peggy **each** have?

A. 3

B. 6

C. 8

D. 9

8. Which equations are **true**? Choose the **two** correct answers.

Pick up to 2 answers.

A.  $8 \times 2 = 14$

B.  $42 \div 7 = 8$

C.  $32 \div 4 = 8$

D.  $8 \times 7 = 42$

E.  $8 \times 4 = 32$

F.  $14 \div 2 = 8$

9. Which equations are **true**? Choose the **three** correct answers.

Pick up to 3 answers.

A.  $(3 \times 2) \times 4 = 3 \times (2 \times 4)$

B.  $4 \times 6 = 4 + 6$

C.  $(5 + 1) \times 4 = 5 + (1 \times 4)$

D.  $6 \times 4 = 4 \times 6$

E.  $4 \times 6 = (4 \times 5) + (4 \times 1)$

10. Which products are equal to 36? Choose the **two** correct answers.

Pick up to 2 answers.

A.  $6 \times 6$

B.  $7 \times 5$

C.  $3 \times 6$

D.  $4 \times 9$

E.  $9 \times 7$

11. Bella sold boxes of cookies to her neighbors to raise money for her basketball team. She sold:

- 4 boxes to Mr. Jacobs
- 6 boxes to Mrs. Harris

Each box had 9 cookies.

How many total cookies did Bella sell?

A. 10

B. 19

C. 90

D. 100

Read the passage - 'VH986838\_directions' - and answer the question below:

VH986838\_directions

Subpart 2 of this test contains different types of assessment questions in Grade 3 Math. You may make notes on scratch paper or use the Notepad tool within the online test. Make sure you answer all the questions. You MAY use a calculator in Subpart 2 of this test.




12. Here is an equation.


$$6 \times 9 = 54$$

The equation can be used to find the area, in square units, of which rectangle?


A.




B.



C.



D.



---

13. Wilbur has 400 stickers.

- He gives 9 stickers each to 8 of his friends.
- He keeps the remaining stickers for himself.

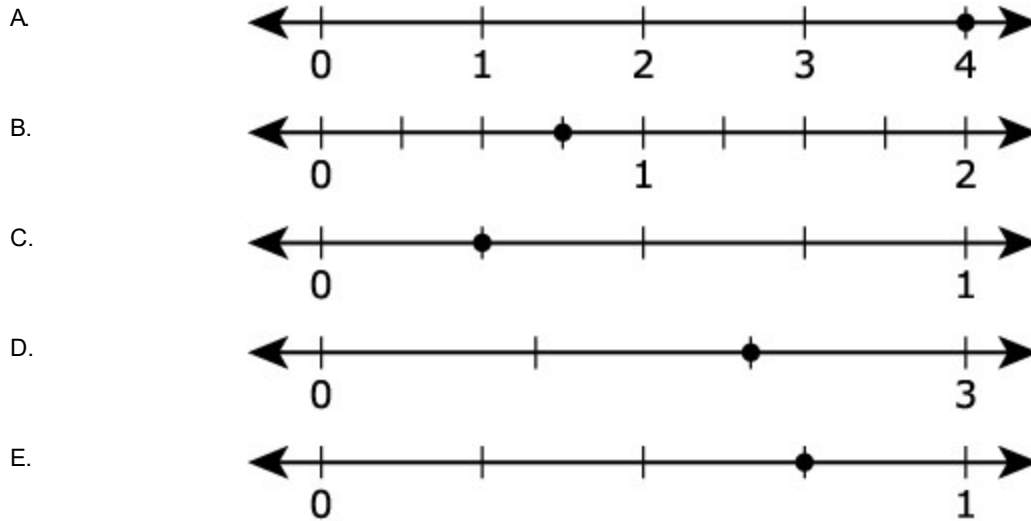
Which is the **best** estimate of the number of stickers that Wilbur keeps for himself?

- A. 40
- B. 80
- C. 330
- D. 380



14. Which number lines have a point at  $\frac{3}{4}$ ? Choose the **two** correct answers.

Pick up to 2 answers.



15. Avery uses a rule to make this pattern.

17, 41, 65, 89

Which number sentence shows the rule being used to find the next number in the pattern?

- A.  $89 + 24 = 113$
- B.  $89 + 34 = 123$
- C.  $89 + 65 = 154$
- D.  $89 + 72 = 161$
16. Rachel has 8 jelly beans. She has 1 red jelly bean.

What fraction of Rachel's jelly beans are red?

- A.  $\frac{8}{1}$
- B. 1
- C.  $\frac{7}{8}$
- D.  $\frac{1}{8}$

17. A rectangular hallway is 3 feet wide and 9 feet long.

What is the area, in square feet, of the hallway?

- A. 12
- B. 16
- C. 27
- D. 39

18. Choose **all** the fractions equivalent to  $\frac{2}{4}$ .

**Pick up to 5 answers.**

- A.  $\frac{1}{2}$
- B.  $\frac{1}{3}$
- C.  $\frac{3}{6}$
- D.  $\frac{4}{6}$
- E.  $\frac{4}{8}$

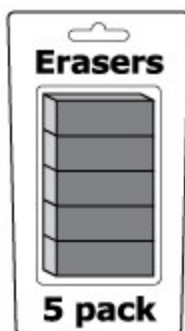
19. Which is another equation that can be used to solve  $56 \div 7 = a$ ?

- A.  $56 - 7 = a$
- B.  $56 - a = 7$
- C.  $a \times 56 = 7$
- D.  $a \times 7 = 56$

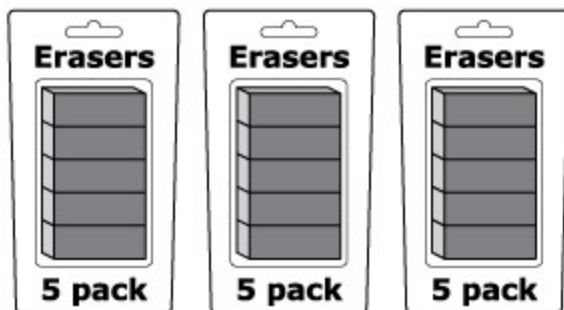
20. Susan is buying erasers for her class of 20 students at school. Each pack contains 5 erasers. Each student will receive one eraser.

Which picture shows how many packs of 5 erasers Susan needs to buy?

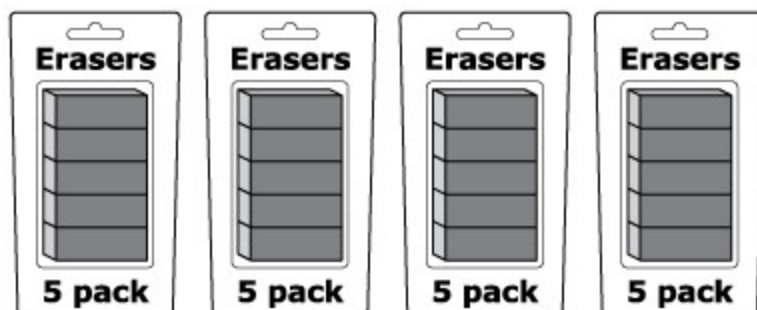
A.



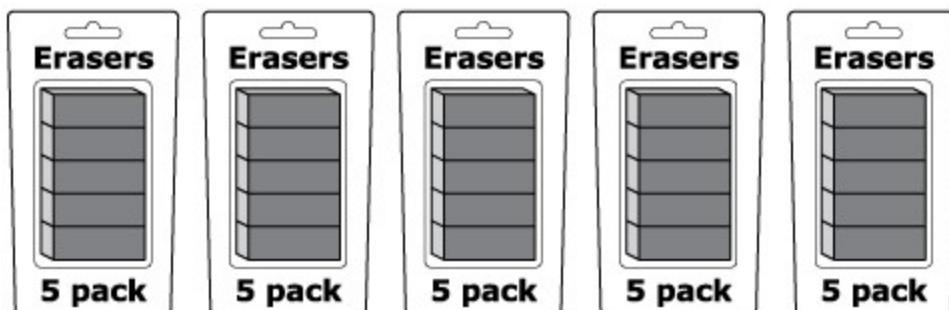
B.



C.



D.



21. A comparison is shown.

$$\frac{5}{8} < \square$$

Choose the **three** fractions that will make the comparison true.

Pick up to 3 answers.

A.  $\frac{1}{8}$

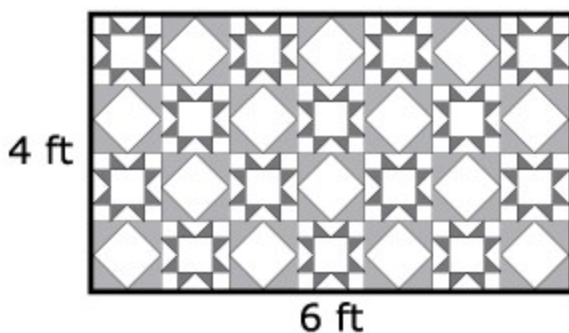
B.  $\frac{5}{1}$

C.  $\frac{5}{6}$

D.  $\frac{5}{8}$


E.  $\frac{6}{8}$

22. Nick has 2 blankets that have the same perimeter but different areas. One blanket is shown.

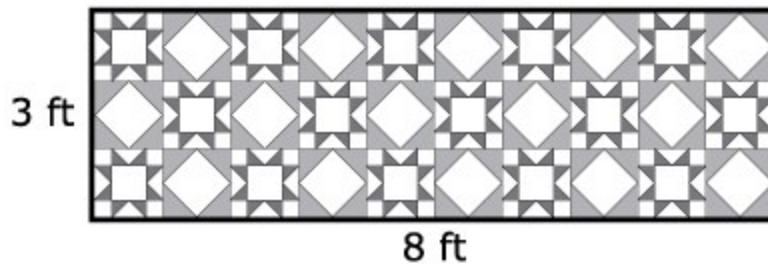


Which blanket could be Nick's other blanket?

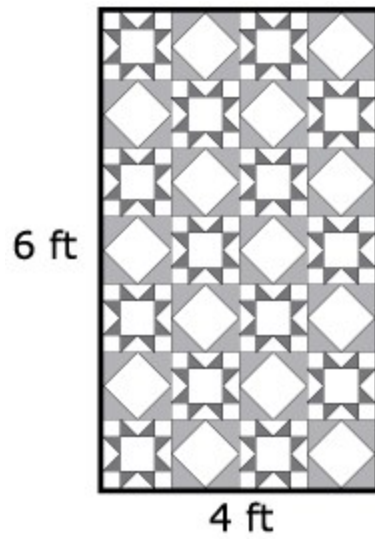
A.



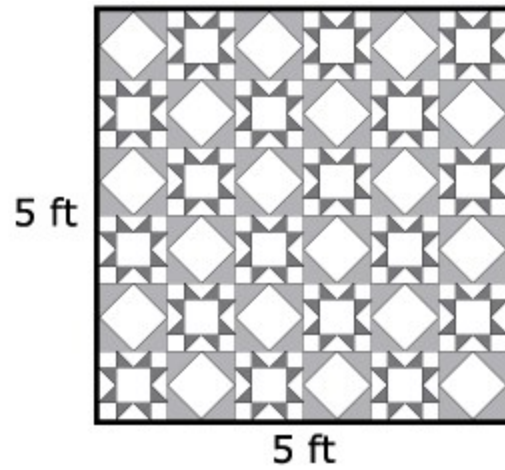
B.



C.



D.



23. Which picture shows  $12 \div 6$ ?

A.



B.



C.




D.




24. Liz is helping her teacher set up 32 chairs for the class play.

Which array shows one way Liz can set up all the chairs?


A.



B.



C.



D.

